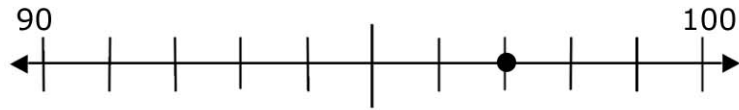


# Rounding to Tens

Circle each number on the number line and then determine what it would be rounded to the nearest ten.

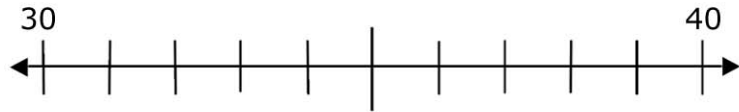
EXAMPLE

1) 97



100

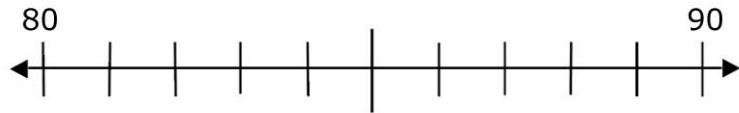
2) 31



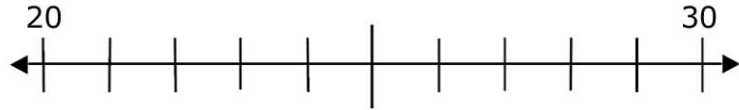
3) 55



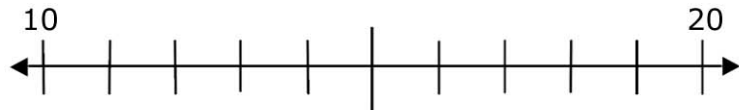
4) 80



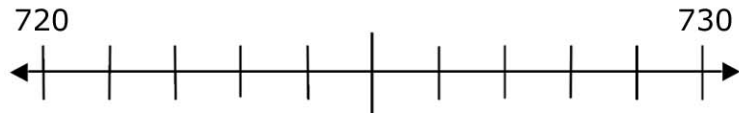
5) 26



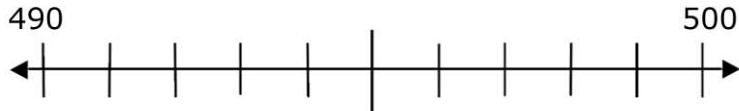
6) 15



7) 727



8) 493



9) 909



10) 89

